


# Telling Time: Mixed Times WORKSHEETS


**NO PREP!**


**Tell Time & Write: Telling Time 13**


Name: \_\_\_\_\_

Directions: Tell the time on the clock and write the time on the line.

1.  \_\_\_\_\_

2.  \_\_\_\_\_


3.  \_\_\_\_\_


4.  \_\_\_\_\_

**Tell Time & Circle: Telling Time 6**

Name: \_\_\_\_\_

Directions: Tell the time on the clock and circle the answer that matches.


  1:00  9:30  7:35


  12:00  6:15  5:00


**Tell Time & Match: Telling Time 13**

Name: \_\_\_\_\_

Directions: Read the analog clock and draw a line to match the digital time.

5.   10:45



  4:30



  1:50



**Cut & Paste: Telling Time 14**

Name: \_\_\_\_\_

Directions: Tell time on the clock, then cut and paste the answer that matches.

# WHAT'S INCLUDED ...

Over 40+  
worksheets!

-4 different  
styles of  
worksheets.


-Each style with  
10-20 pages of  
repetition with  
the skill!


**Tell Time & Circle:  
Telling Time 3**

**Name:** \_\_\_\_\_

**Tell Time and Circle**

Directions: Tell the time on the clock and circle the answer that matches.

  10:00  10:30  6:15


  7:35  12:05  10:15


**Tell Time & Match:  
Telling Time 2**


**Name:** \_\_\_\_\_

**Tell Time and Match**

Directions: Read the analog clock and draw a line to match the digital time.

  3:15

  5:05

  3:20

**CREATED BY: TEACH LOVE AUTISM**

# WHAT'S INCLUDED...





## 4 types of worksheets for counting money!

**Name:** \_\_\_\_\_

**Cut & Paste: Telling Time 4**

**Tell Time, Cut, and Paste**

Directions: Tell time on the clock, then cut and paste the answer that matches.

 [ ]	 [ ]
 [ ]	 [ ]

6:00 5:45 3:30 11:15 5:40 1:15 1:35 10:30 3:20






**CUT AND PASTE**

**Name:** \_\_\_\_\_

**Tell Time & Circle: Telling Time 6**

**Tell Time and Circle**

Directions: Tell the time on the clock and circle the answer that matches.

	1:00	9:30	7:35
	12:00	6:15	5:00
	[ ]	[ ]	[ ]
	9:40	10:15	9:00
	3:30	6:15	6:55

3:00 6:15 8:40 10:15 1:35 10:15







**CIRCLING**

**Name:** \_\_\_\_\_

**Tell Time & Write: Telling Time 3**

**Tell Time and Write**

Directions: Tell the time on the clock and write the time on the line.

1.  _____	2.  _____
3.  _____	4.  _____
5.  _____	6.  _____





**WRITING**

**Name:** \_\_\_\_\_

**Tell Time & Match: Telling Time 13**

**Tell Time and Match**

Directions: Read the analog clock and draw a line to match the digital time.

	10:45
	4:30
	7:00
	11:45

3:15 5:05 8:00 8:45

**MATCHING**

# HOW TO USE THIS ...

-Morning work as students arrive.

-Early finisher activities.

Classwork or homework.

-Use in paraprofessional led station with students!







-Great for progress monitoring

The image shows a green clipboard with a silver clip at the top, holding a worksheet. The worksheet is titled "Cut & Paste: Telling Time 4" and "Tell Time, Cut, and Paste". It includes a "Name:" field and a "Directions:" section: "Directions: Tell time on the clock, then cut and paste the answer that matches." The worksheet features a 3x2 grid of analog clocks. Each clock has a corresponding empty box below it for the student to write the time. At the bottom of the grid, there are six time options: 6:00, 5:45, 3:30, 11:15, 5:40, and 1:15. The worksheet is surrounded by school supplies: a blue and yellow spiral notebook, a clear container of colorful pencils and markers, a red marker, an orange marker, a yellow marker, a green marker, a blue marker, a pair of scissors, a glue stick, and a pink eraser.

**Name:** \_\_\_\_\_

**Tell Time, Cut, and Paste**


Directions: Tell time on the clock, then cut and paste the answer that matches.

 <input type="text"/>	 <input type="text"/>
 <input type="text"/>	 <input type="text"/>
 <input type="text"/>	 <input type="text"/>

6:00   5:45   3:30   11:15   5:40   1:15

CREATED BY: TEACH LOVE & AUTISM

**MULTIPLE WORKSHEETS ON THE SAME SKILLS TO GET THE REPETITION NEEDED TO MASTER IT!**





**Tell Time & Write:  
Telling Time 13**


**Name:** \_\_\_\_\_


**Tell Time and Write**

Directions: Tell the time on the clock and write the time on the line.

1.  \_\_\_\_\_

2.  \_\_\_\_\_

3.  \_\_\_\_\_


4.  \_\_\_\_\_


**Tell Time & Circle:  
Telling Time 6**

**Name:** \_\_\_\_\_

**Tell Time and Circle**

Directions: Tell the time on the clock and circle the answer that matches.

  1:00  9:30  7:35


  12:00  6:15  5:00


**Tell Time & Match:  
Telling Time 13**


**Name:** \_\_\_\_\_


**Tell Time and Match**

Directions: Read the analog clock and draw a line to match the digital time.

5.   10:45

  4:30

  1:50



  7:00



**Cut & Paste:  
Telling Time 14**



**Name:** \_\_\_\_\_

**Tell Time, Cut, and Paste**

Directions: Tell time on the clock, then cut and paste the answer that matches.





**Tell Time & Write: Telling Time 3**


Name: \_\_\_\_\_


**Tell Time and Write**

Directions: Tell the time on the clock and write the time on the line.

1.  \_\_\_\_\_

2.  \_\_\_\_\_


3.  \_\_\_\_\_


4.  \_\_\_\_\_

**Cut & Paste: Telling Time 14**

**Time, Cut, and Paste**

Directions: Tell the time on the clock, then cut and paste the answer that matches.

1.  \_\_\_\_\_





2.  \_\_\_\_\_

**Tell Time & Match: Telling Time 2**

Name: \_\_\_\_\_

**Tell Time and Match**

Directions: Read the analog clock and draw a line to match the digital time.




	3:15
	5:05
	3:20
	

**Tell Time & Circle: Telling Time 3**

Name: \_\_\_\_\_

**Tell Time and Circle**

Directions: Tell the time on the clock and circle the answer that matches.

	10:00	10:30	6:15
	7:35	12:05	10:15
	1:35	7:30	8:40



# YOU MIGHT ALSO LIKE...

CLICK ON ANY IMAGE TO GO TO THE PRODUCT!

